

# NEW ERA PUBLIC SCHOOL

(Session:2022)

Name: \_\_\_\_\_

Class: \_\_\_\_\_ Sec: \_\_\_\_\_

Class: U.K.G

Examination: Unit 1st

Paper: Recitation and Conversation

M.M:20

## **Recitation:**

Recite the following rhymes with actions:

(5x2=10)

1.Little Jack Horner

2.Number Rhyme

## **Conversation:**

Answer any five questions. All questions carry equal marks.

(2x5=10)

1.How many eyes do you have?



2.How old are you?

3.Which is your favourite game?



4.What is your father?



5. Who cooks food for you?



6. How do you taste?



7. When do you get up in the morning?

**Note :** *Conduct the following paper orally*

# NEW ERA PUBLIC SCHOOL RAJBAG SRINAGAR

## Examination Unit-1

*Subject: English*

*Class: U.K.G*

*Name: \_\_\_\_\_*

*Session: 2022*

*Roll no: \_\_\_\_\_*

*Max.Marks: 20*

*Section: \_\_\_\_\_*

*Q no.1: Use of a or an:*

1. \_\_\_\_\_ umbrella

2. \_\_\_\_\_ hen

3. \_\_\_\_\_ elephant

4. \_\_\_\_\_ duck

5. \_\_\_\_\_ toy

6. \_\_\_\_\_ owl

*Marks 3*

*Q no.2: Make sentences of given words:*

1. *Fish:* \_\_\_\_\_

2. Ball: \_\_\_\_\_

3. Girl: \_\_\_\_\_

Marks 3

Q no. 3: Match the pictures with the words:

1. Cup



2. Bed



3. Van



4. Cap



5. Man



Marks 2½

*Q.no.4: Fill in the missing letters:*

a. H \_ t

b. T \_ n

c. J \_ g

d. B \_ x

e. P \_ n

*Marks 2½*

*Q.no.5: Choose any Six sentences from the given assignment for transcription.*

1. \_\_\_\_\_

2. \_\_\_\_\_

3. \_\_\_\_\_

4. \_\_\_\_\_

5. \_\_\_\_\_

6. \_\_\_\_\_

*Marks 3*

*Q no. 6: Choose any twelve words from the given assignment for Dictation.*

1. \_\_\_\_\_

7. \_\_\_\_\_

2. \_\_\_\_\_

8. \_\_\_\_\_

3. \_\_\_\_\_

9. \_\_\_\_\_

4. \_\_\_\_\_

10. \_\_\_\_\_

5. \_\_\_\_\_

11. \_\_\_\_\_

6. \_\_\_\_\_

12. \_\_\_\_\_

*Marks 6*

New Era Public School.

Name :->

class :-> U.K.G Sec.


R.no:-

Paper :-> Drawing

unit 1st 2022

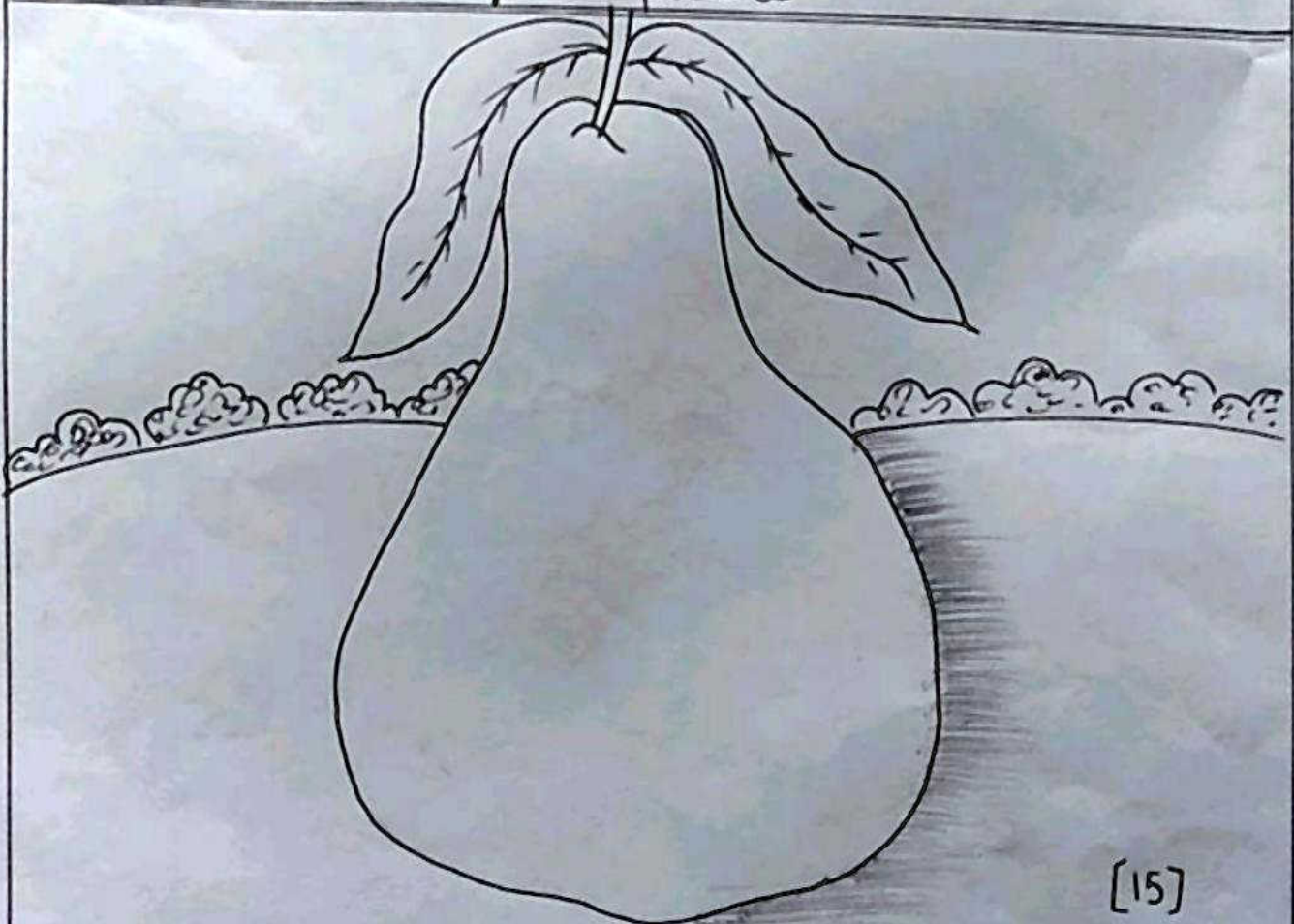
Marks :- 20

Qno1 :-> Join the dotted line.



[05]

Qno :-> 2 Colour the given picture.



[15]

Class : U.K.G

NEPS

M. Marks : 20

Subject : Hindi

Unit I 2022

Name :

Sec :

Roll no :

प्र०१ :

पाठ लेखन

यश	जल	भर	कर	अर

(05)

प्र०२ : खाली स्थान भरें :

1. पर चल ।

2. अजय इधर - उधर टहल ।

3. पकड़ ।

4. यश पर चल ।

(02)



प्र० 3: आ. (T) की मात्रा वाले कोई चार (4) शब्द

लिखें।

- 1.
- 2.
- 3.
- 4.

(02)

प्र० 4: कोई चार (4) सब्जियों के नाम लिखें।

- 1.
- 2.
- 3.
- 4.

प्र० 5:

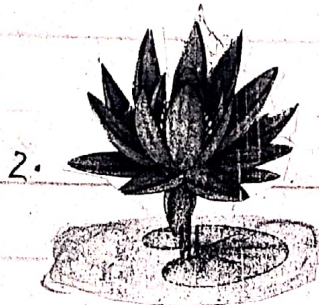
शब्दलिख (Dictation words)

(02)

- 1.
- 2.
- 3.
- 4.
- 5.
- 6.

(06)

प्र० 6: चित्रों को पहचानकर उनके नाम लिखें।



1. -----
2. -----
3. -----

(03)

نیو-ایرا-پبلک اسکول راجپاٹ

یونٹ:- اول ۲۰۲۲ نام:- \_\_\_\_\_ درجہ:- یو-کے-جی

نمبرات:- ۲ رول نمبر سیکشن:- \_\_\_\_\_ پیرچہ:- اُردو

سوال نمبر ۱، خالی جگہوں کو پُر کریں:-

۱. اب ..... ۲. ..... دو ۳. اس .....  
۴. ..... دے (۵) ..... (۶) دن ..... اس

سوال نمبر ۲، جوڑ کر لکھئے :-  
(۳)

	۱. ب + ا
	۲. د + س
	۳. ص + ا
	۴. د + ن
	۵. ا + ۵
	۶. ب + ل

سوال نمبر ۳، چار پھلوں کے نام لکھئے -

۱. \_\_\_\_\_ ۲. \_\_\_\_\_

۳. \_\_\_\_\_

۴. \_\_\_\_\_

سوال نمبر ۲، "مشق" (دیئے گئے ایساٹمنٹ میں سے صرف  
چار رائے مشق میں لکھئے)

۱

۲

۳

۴

(۲)

سوال نمبر ۵، "املا" (دیئے گئے ایساٹمنٹ میں سے صرف  
پانچ الفاظ املا میں لکھئے)

۱

۲

۳

۴

۵

۵

سوال نمبر :- دیئے گئے حروف کو تصویروں سے ملائیے



راجا



سارا



مالا



ناچا

New Era Public School Rajbagh  
 Examination Unit I<sup>st</sup> Session:- 2022  
 Class:- U.K.G. Subject:- Mathematics  
 Name:- \_\_\_\_\_ Sec:- \_\_\_\_\_  
 Rollno:- \_\_\_\_\_ M. Marks:- 20

Q. no: 1:- Write in words:-

13 \_\_\_\_\_ 9 \_\_\_\_\_ 4 \_\_\_\_\_  
 6 \_\_\_\_\_ 10 \_\_\_\_\_ 8 \_\_\_\_\_



Q. no: 2:- Write Backward Counting (3)  
 from 20 to 5

20 \_\_\_\_\_ 18 \_\_\_\_\_ 16 \_\_\_\_\_  
 14 \_\_\_\_\_ 12 \_\_\_\_\_ 10 \_\_\_\_\_  
 8 \_\_\_\_\_ 6 \_\_\_\_\_ (4)

Q. no: 3:- Write Dodging table

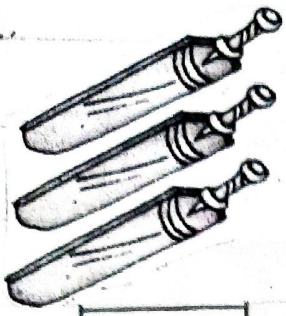



i)  $4 \times 3 =$  \_\_\_\_\_ ii)  $4 \times 5 =$  \_\_\_\_\_ iii)  $4 \times 7 =$  \_\_\_\_\_  
 iv)  $4 \times 10 =$  \_\_\_\_\_ v)  $4 \times 8 =$  \_\_\_\_\_ vi)  $4 \times 9 =$  \_\_\_\_\_

Q. no: 4:- Tick (✓) the bigger object. (3)



(2)

Q.No.5: Cross [X] the collection with less objects:

1.    


(2)

Q.No.6: Match the numbers with the collection containing the same no. of things:


3



5



4




2



(2)

Q. No. 7: Tick [✓] the object which is ON and cross [X] the object which is UNDER:

(i)





(ii)




(2)

Q. No. 8: Tick [✓] the collection with more objects:

(i)



(ii)



(2)

N&W GRA PUBLIC SCHOOL (Session:-2022)

CLASS:- U.K.6

EXAMINATION:- UNIT 1<sup>st</sup>

PAPER:- SCIENCE

M.MARKS:- 20

NAME:-

SEC:-

R.no:->

Answer the following questions:-

Ques no 1:- Write the name of 2 living things?

a. \_\_\_\_\_ .

b. \_\_\_\_\_ .

(4)

Ques no 2:- Write the name of 2 non-living things?

a. \_\_\_\_\_ .

b. \_\_\_\_\_ .

(4)

Ques no 3. Write 'L' for living things and 'N' for non-living things?

1. Book

2. Horse

3. Chair

4. Girl

5. Pen

6. Fish


7. Doll

8. Horse


(4)



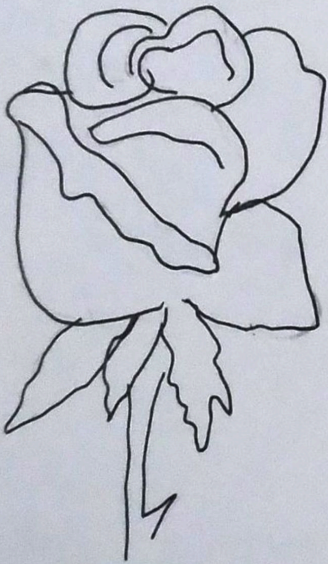
Ques no 4:- Identify the pictures & name them




1. \_\_\_\_\_



2. \_\_\_\_\_



3. \_\_\_\_\_



4. \_\_\_\_\_

(8)