


New Era Public School.

Name :-> _____ Class :-> U.K.G _____ R.no _____


Paper :-> Drawing Term II 2021 M.Marks :-> 80

Qno1 :-> Join the dotted line.



[20]

Qno2 :-> Colour the given picture.



[60]

نیو - ایوا - پبلک اسکول راجپانگ

ٹرم :- دوئم ۲۰۲۱ء نام :- سیکشن :- نمبر :- ۸۰

پرچہ :- اردو رول نمبر :- درجہ :- یو کے - جی

سوال نمبر ۱۔ جوڑ کر لکھئے :-

۱. ن + ا + ن + ی

۲. د + ا + د + ا

۳. م + ا + م + ی

۴. م + و + س + ی

۵. ن + ا + ن + ا

۶. چ + ا + چ + ی

سوال نمبر ۲۔ خالی جگہوں کو پُر کریں



۱. ہم سے دیکھتے ہیں۔



۲. ہم سے کاٹتے ہیں۔



۳. ہم سے چلتے ہیں۔



۴. ہم سے پکڑتے ہیں۔



۵. ہم سے سنتے ہیں۔

سوال نمبر ۱۱

مذکور

موتث

۱۲.۹

ی
کی
نی
جی
لہ
ی

۱. دادا

۲. لڑکا

۳. نانا

۴. چاچا

۵. خالی

۶. گھوڑا

۶)

سوال نمبر ۱۲، سفٹ کے پہلے پانچ دنوں کے نام لکھئے:-

۱. _____

۲. _____

۳. _____

۴. _____

۵. _____

سوال نمبر ۱۵، جسم کے چار اعضاء کے نام لکھئے؟


۱)

۲)

۳)

۴)

سوال نمبر: مضمون "گائے" پر پانچ جملے لکھئے:-



- ۱.
- ۲.
- ۳.
- ۴.

(۵)

سوال نمبر (۱۴) "مشق" (دیئے گئے ایسایٹمنٹ کو قدر نظر رکھ کر مشق میں سے صرف چھ سطروں کی مشق لکھئے)

- ۱.
- ۲.
- ۳.
- ۴.
- ۵.

(۱۲)

سوال نمبر ۱۸: سال کے پہلے چھ مہینوں کے نام لکھئے:-

- ۱۹
- ۲۰
- ۲۱
- ۲۲

سوال نمبر ۱۹ "املا" (دیئے گئے ایسایٹمنٹ کو قدر نظر رکھ کر صرف ۲۱ الفاظ املا میں لکھئے)

۱	۲	۳	۴	۵
۶	۷	۸	۹	۱۰
۱۱	۱۲	۱۳	۱۴	۱۵
۱۶	۱۷	۱۸	۱۹	۲۰
۲۱	۲۲	۲۳	۲۴	۲۵

(۲۱)

Class: U.K.G

Subject: Hindi

Name:

M. Marks: 80

Term II 2021

Roll no: Sec:

पाठ लेखन

प्र०1:

यह मिठाई की दुकान है

(05)

(इस पाठ लेखन को अपने Ans sheet पर पूरा करके लिखें)

प्र०2: औ (ँ) की मात्रा वाले पाँच शब्द लिखें।

1.

2.

3.

4.

5.

(10)

प्र०३: लिंग बदलो:

1. वकरा
2. पिता
3. लड़का
4. घोड़ा
5. मामा

(10)

प्र०४: शब्दों को जोड़ कर लिखिए:

1. च + म + 1 + ली
2. व + 1 + च + र + र + र
3. द + 1 + न + र + क
4. ख + 1 + ल

(04)

प्र०५: खाली स्थान भरिए:

1. तुम भी एक लगाओ ।
2. हलवाई तोल रहा है ।
3. कौआ ले उड़ा ।
4. कैलाश उसे से लाया था ।
5. आम, चट कर जाता ।

(05)

प्र०६: दुकान पर क्या मिलता है ?

उत्तर:

प्र०७: पंडित जी क्या कर रहे थे ?

(02)

उत्तर

(02)

प्र०८: निबंध लिखे:

गाय (5 Points)

1.

2.

3.

4.

5.

(10)

प्र०९: अं (') की मात्रा वाले चार शब्द लिखें:

1.

3.

2.

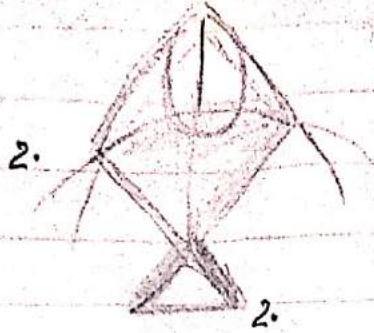
4.

(04)

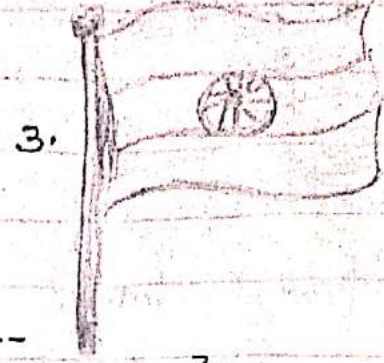
प्र०. 10 चित्रों को पहचानकर उनके नाम लिखें:




1. -----



2. -----



3. -----



4. -----

(08)

प्र०. 11 अपनी Assignment में चुनकर कोई 10 शब्द (Dictation-words) अपनी Ans sheet पर लिखें:

1.

2.

3.

4.

5.

6.

7.

8.

9.

10.

11.

12.

13.

14.

15.

16.

17.

18.

(10)

प्र०. 12 चित्र देखकर सही शब्द के सामने (✓)
का चिह्न लगाइए।

1.



करेला

ठेला

2.



कोट

मोर

(02)

New Era Public School, Rajbagh

Examination : Term 2nd

Session : 2021

Class : U.K.G

Subject : Math

Name : _____

Max. Marks : 80

Sec : _____

Roll No - _____

Q. No. 1: Subtraction (-) :

$$\begin{array}{r} 2 \\ - 1 \\ \hline \end{array}$$

$$\begin{array}{r} 4 \\ - 2 \\ \hline \end{array}$$

$$\begin{array}{r} 5 \\ - 5 \\ \hline \end{array}$$

(6)

Q. No. 2: Write in Backward counting:

80

75

70

67

(10)

Q. No. 3: Dodging table of 8 :

$$1. 8 \times 3 =$$

$$2. 8 \times 5 =$$

$$3. 8 \times 6 =$$

$$4. 8 \times 2 =$$

$$5. 8 \times 10 =$$

$$6. 8 \times 7 =$$

(6)

Q. No. 4: Draw the figure of triangle :

(5)

Q. No. 5: a, Write the numerals:

- | | | | |
|------------------|----------------------|-----------------|----------------------|
| i, Thirty | <input type="text"/> | ii, Forty-one | <input type="text"/> |
| iii, Forty-eight | <input type="text"/> | iv, Twenty-five | <input type="text"/> |
- (4)

b, Write the number names:

- | | |
|---------|--------|
| i) 36 | ii) 28 |
| iii) 42 | iv) 39 |

(4)

Q. No. 6: a, What comes after?

- | | |
|---------------------------------------------------|----------------------------------------------------|
| i) <input type="text"/> 25 → <input type="text"/> | ii) <input type="text"/> 49 → <input type="text"/> |
|---------------------------------------------------|----------------------------------------------------|

b, What comes before?

- | | |
|------------------------------|-------------------------------|
| i) <input type="text"/> ← 29 | ii) <input type="text"/> ← 40 |
|------------------------------|-------------------------------|


c, What comes in between?

- | | |
|--------------------------------------------------------|---------------------------------------------------------|
| i) <input type="text"/> 27 — <input type="text"/> — 29 | ii) <input type="text"/> 20 — <input type="text"/> — 22 |
|--------------------------------------------------------|---------------------------------------------------------|

(12)

Q. No. 7: Five birds are sitting on a tree. One bird flies away. How many birds are left on the tree?

$$5 - 1 = \boxed{}$$



(5)

Q. No. 8: Fill in the boxes:

(i)

5	+1	→	<input type="text"/>
	+3	→	<input type="text"/>
	+4	→	<input type="text"/>


(ii)

6	+5	→	<input type="text"/>
	+4	→	<input type="text"/>
	+7	→	<input type="text"/>


(6)

Q. No. 9: Count the number of articles in each box and write the number:

(i)

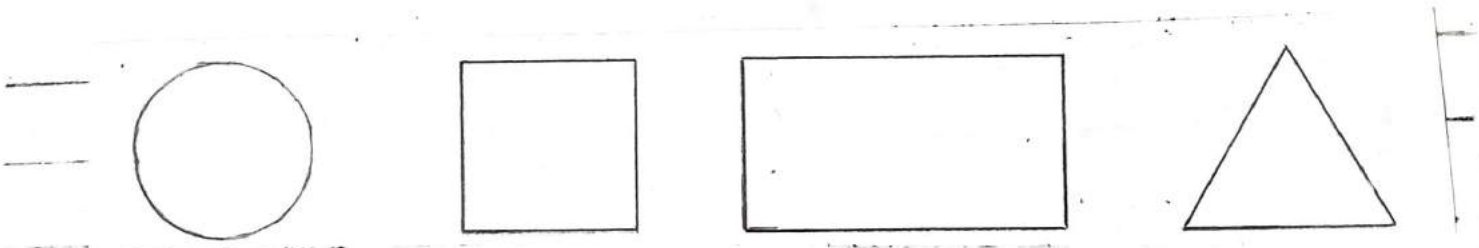


(ii)



(6)

Q. No. 10: Write [C] in the circle, [S] in the square, [R] in the rectangle and [T] in the triangle:



(6)

Q. no. 11, Find the difference by counting backward.

i, $13 - 3 =$

ii, $20 - 8 =$

iii, $18 - 8 =$


iv, $19 - 7 =$

(4)

Q. no. 12: Count the articles in each collection and encircle the correct number:



39 40 41



26 27 28

(6)

N&W GRA PUBLIC SCHOOL

P. no 1

Session:- 2021

CLASS:- U.K.G

EXAMINATION:- TERM IInd

PAPER:- SCIENCE

M. MARKS:- 80

Name:-

Sec:-

R. no:-

Attempt all the questions:-

Quesno 1:- What are water Animals? (10)

Answer:-

Quesno 2:- Write three uses of water? (12)

Answer:- a:-

b:-

c:-

Quesno 3:- Fill ups:-

(10)

1. Some animals live in

2. Animals also make their

to live in.

P. T. O

3. Birds have _____ .

4. Most of the birds _____ in the air .


5. We need water to _____ .

Ques no 4 :- Write the young ones of these animals ? (15)

- a. Lion _____ .
- b. Sheep _____ .
- c. Cow _____ .
- d. Hen _____ .
- e. Cat _____ .

Ques no 5:- Match the following animals with their homes. (15)

P.no-3.



Lion Cub Cave



Pup Kennel



Baby Rabbit Burrow



Calf / Heifer Shed



Colt / Filly Stable

Ques no 6:- Write 'W' for wild animals and 'D' for domestic animals? (10)



(i) _____



(ii) _____



(iii) _____



(iv) _____



(v) _____

Ques no 7:- Missing Letters:-

(8)

1. W _ a l _ .
2. k _ g _ e .
3. P _ r _ o _ .
4. F _ s _ .
5. C _ o _ .

NEW ERA PUBLIC SCHOOL RAJBAQH SRINAGAR

Examination: Term 2nd

Class: U.K.G

Subject: English

Session: 2021

Name: _____

Max. Marks: 80

Roll no: _____

Section: _____

Q no.1: Answer the given questions:

a. How many girls are there?



Ans: _____

b. How many candles are there?



Ans: _____

c. Who fell asleep?

Ans: _____

d. Who went to the zoo?

Ans: _____

e. Who wins the race?

Ans: _____

Marks 15

Q no. 2: Write the names of first five months of the year.

1. _____

2. _____

3. _____

4. _____

5. _____

Marks 10

Q no. 3: Make sentences of given words:

1. Fast: _____

2. Never: _____

3. Went: _____

4. Food: _____

5. Lost: _____

Marks 10

Q no. 4: Look at the pictures and fill in the blanks:

Ans:



1. We see with our _____



2. We hear with our _____



3. We smell with our _____



4. The bag is _____.



5. The leaf is _____.

Marks 10

Q.no.5: Write five sentences on 'Cow'.

1. _____

2. _____

3. _____

4. _____

5. _____

Marks 10

Q no 6: Transcription

Choose any seven sentences from the given assignment for transcription.

1. _____

2. _____

3. _____

4. _____

5. _____

6. _____

7. _____

Marks 7

Q no. 7: Dictation

Choose any eighteen words from the given assignment for dictation.

1. _____

13. _____

2. _____

14. _____

3. _____

15. _____

4. _____

16. _____

5. _____

17. _____

6. _____

18. _____

7. _____

8. _____

9. _____

10. _____

11. _____

12. _____

Marks 18

NEW ERA PUBLIC SCHOOL

(Session: 2021)

Name: _____

Sec: ___ Roll no. ___

Class: U.K.G.

Examination: Term II

Paper: Recitation and Conversation

M.M: 80

Rhymes:

Recite **any two** rhymes from the following:

(20x2=40)

1. A Dillar, A Dollar
2. Little Bo-Peep
3. The Least I Can Do

Conversation:

Answer any **five** questions. All the questions carry equal marks.

(8x5=40)

1. What is a pencil made of?



2. How many books do you have?



3. What are shoes made of?



4. Should we follow traffic rules?



5. What is a house made of?



6. Should we get into the moving bus?



7. How many days are there in a week?

Note: Conduct the following paper orally.