

NEW ERA PUBLIC SCHOOL RAJBAGH SRINAGAR

Examination: Term 1st

Session: 2021

Subject: English

Class: U.K.G

Name: _____

Max.Marks: 60

Roll no: _____

Section: _____

Q no.1: Answer the following questions:

a. Where is the cat?

Ans: _____

b. When do you sleep?

Ans: _____

c. *Who is cooking the dinner?*

Ans: _____

d. *What are the girls doing?*

Ans: _____

Marks 8

Q no. 2: Look at the pictures and fill in the blanks with in, on, near, under, behind;

1.  *The fish is _____ the water.*

2. *The boy is _____ the ball.*





3. The rabbit is _____ the table.



4. The car is _____ the boy.



5. The monkey is _____ the tree.

Marks 5

Q. no. 3: Make Sentences:

1. School: _____

2. Sleep: _____

3. Under: _____

4. Night: _____

5. Play: _____

Marks 10

Q.no.4: Write the names of first five days of the week?

1. _____

2. _____

3. _____

4. _____

5. _____

Marks 5

Q.no.5: Write five sentences on "Myself".

1. _____

2. _____

3. _____

4. _____

5. _____

Marks 10

Q. no. 6: Fill in the blanks using I, My, He, She;

1. _____ school is big.

2. _____ am riding _____ cycle.

3. _____ plays with his sister.

4. _____ helps her mother at home.

Marks 8

Q. no. 7: Transcription:

Choose any eight sentences from the given assignment

for transcription.

1. _____

2. _____

3. _____

4. _____

5. _____

6. _____

7. _____

8. _____

Marks 4

Q no. 8: Dictation:

Choose any twenty words from the given assignment for dictation.

1. _____

14. _____

2. _____

15. _____

3. _____

16. _____

4. _____

17. _____

5. _____

18. _____

6. _____

19. _____

7. _____

20. _____

8. _____

9. _____

10. _____

11. _____

12. _____

13. _____

Marks 10

NEW ERA PUBLIC SCHOOL
RAJBAGH SRINAGAR

Class: U.K. I Session: 2021

Subject: Math Max: Marks: 60

Examination: Term Ist

Q. no. 1: Addition of 2-digit number:

$$\begin{array}{r} \text{i, } 6 \\ + 3 \\ \hline \end{array}$$

$$\begin{array}{r} \text{ii, } 5 \\ + 5 \\ \hline \end{array}$$

$$\begin{array}{r} \text{iii, } 3 \\ + 3 \\ \hline \end{array}$$

(9)

Q. no. 2: Dodging table of 6:

$$\text{i, } 6 \times 4 = \underline{\quad}$$

$$\text{ii, } 6 \times 6 = \underline{\quad}$$

$$\text{iii, } 6 \times 8 = \underline{\quad}$$

(6)

Q. no. 3: Write in words:

i, 30

ii, 36

iii, 43

(6)

Q. no. 4: Draw the figure of Rectangle:

(5)

Q. no. 5: Fill ups:

1. Put ($<$) ($>$) and ($=$)

i. 5 _____ 2 | ii. 4 _____ 8

iii. 15 _____ 15 (3)

2. Write in ascending order from 1 to 10

1 _____ 6 _____

3. Write in descending order from 10 to 1:

10 _____
_____ 1 _____

Q. NO. 6: Which number comes just after:

1. $15 \rightarrow$

$19 \rightarrow$

ii. Which number comes just before:

1. $\leftarrow 14$



$\leftarrow 18$

ii. Which number comes in between:

1. $12 -$ $- 14$


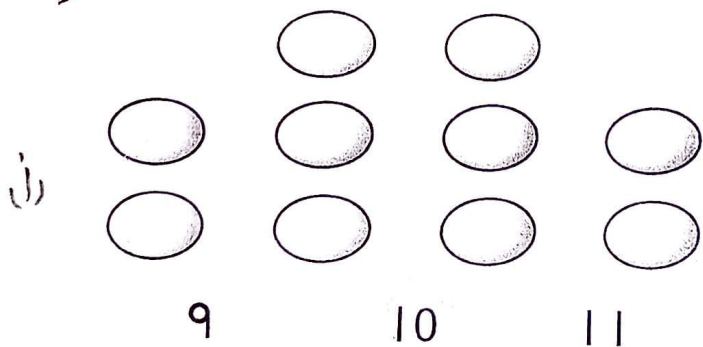
2. $15 -$ $- 17$

Q. NO. 7. Count the objects in each collection and write its number:



(6)

Q. NO. 8. Count the objects in each collection and encircle the correct number:



(6)

NEW ERA PUBLIC SCHOOL

CLASS:- U.K.G

EXAMINATION:- TERM IST

PAPER- SCIENCE

M.Marks:- 60

NAME:- _____

SESSION:- 2021

SEC:- _____

ROLL NO:- _____

Attempt all the questions.

Quesno 1:- Write the name of three fruits which have only one seed? (06)

Quesno 2:- Write three good habits? (09)

Quesno 3:- Write three means of transport? (03)

Quesno 4:- Which is the fastest means of transport? (03)

Quesno 5:- Jumbled words:-

a) UBS - _____

b) ARC - _____

c) RAE - _____

(6)

Quesno 6:- Fillups:-



- a) _____ are found inside the fruits.
- b) Some plants give us _____.
- c) we should keep our body _____.
- d) we see different types of _____.
- e) some _____ have many seeds. (10)

Quesno 7:- Missing Letters :-


- a) B _ s .
- b) N _ b _ .
- c) C _ R .
- d) P _ T _ T _ .
- e) M _ N _ O . (5)

Quesno 8:- Identify the pictures & name them

a)




2.



3.



4.



5.



6.



7.



8.



9.



پہر جس: اردو نام: نمبرات: - 4

درجہ: یو کے - جی سیکشن: ٹرم: اول ۲۰۲۰ء

سوال نمبر ۱: خالی جگہوں کو پُر کریں۔ رول نمبر:

۱. سور ناچ

۲. جا راجا لا

۳. خان چاچا پان

۴. آیا مثال دے

۵. چار چار دس (۱۰)

سوال نمبر ۲: جوڑ کر لکھئے:

۱. ت + ا + ر + ا

۲. م + د + س + ی

۳. ر + ا + ج + ا

۴. آ + پ + ا + آ

۵. ج + ا + ب + ی

۶. گ + ا + ن + ا

۳

سوال نمبر ۳: تین سبزیوں کے نام لکھئے

جواب ۱:

۲:

۳:

۳

سوال نمبر ۱۰ ذیل میں دیئے گئے الفاظ کے جملے بنائیے :-

۱. بے ادب :-

۲. صاف :-

۳. بادل :-

۴. مت :-

۵. خالق :-

(۵)

سوال نمبر ۱۱ تین رنگوں کے نام لکھئے :-

جواب ۱۔ ۲۔ ۳۔

سوال نمبر ۱۲ "مشق" (پانچ سطروں کی مشق لکھئے) (دیئے گئے ایساٹمنٹ میں سے حرف

۱.

۲.

۳.

۴.

۵.

(۱۰)

سوال نمبر ۱۳ "املا" (دیئے گئے ایساٹمنٹ میں سے حرف بارہ لفظ املا میں لکھئے)

۱. ۲. ۳. ۴. ۵. ۶. ۷. ۸. ۹. ۱۰. ۱۱. ۱۲.

(۱۲)

(۱۰۰۵)

سوال نمبر ۸: حروف کو ترتیب دیکر لفظ بنائیے :-

(۱۲)

ترتیب

بے ترتیب



۱. ا ب ج د - ع - ف



۲. د ر ج پ - ع - و



۳. ت ر ل - ع - ا



۴. ق - م - ل

سوال نمبر ۹: بے ترتیب الفاظ کو ترتیب دیکر صحیح طریقے سے لکھئے :- (۱۰)

۱. بے سیب لال

۲. کاٹو پودے مت

۳. پیر بے کتاب میز

۴. مت ادب بن بے

۵. لکھ سے قلم

NEW ERA PUBLIC SCHOOL

(Session: 2021)

Name: _____

Roll no. _____

Class: U.K.G.

Section: _____

Examination: Term 1

M.M: 60

Paper: Recitation and Conversation

Rhymes:

Recite the following rhymes:

(15x2=30)

1. Butterfly, Butterfly
2. Hey Diddle, Diddle

Conversation:

Answer any **six** questions. All questions carry equal marks. (5x6=30)

1. What is the name of your principal?




2. Do you like your teacher?



3. Where does a monkey live?



4. Where does cow live?



5. What do you call the young one of a dog?



6. Where does a bird live?



7. What is the name of your teacher?

Note: Conduct the following paper orally

New Era Public School Rajbagh.
Examination Term 1st 2021

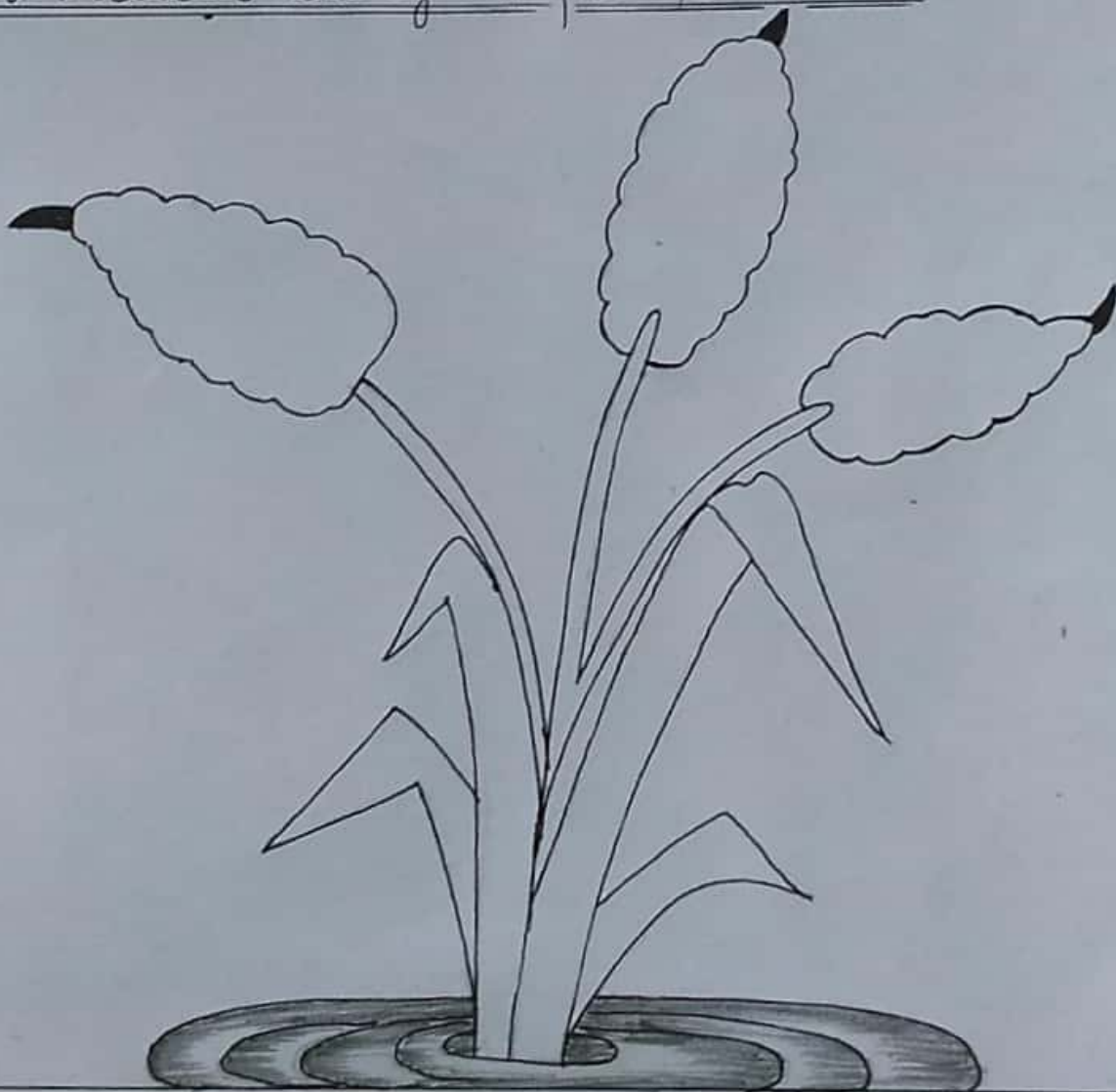
Name :-> _____ Class :-> U.K.G Sec :-> _____
Paper :-> Drawing Roll no. _____ M.Marks :-> 60

Qno1 :-> Join the dotted line.



[20]

Qno2 :-> Colour the given picture.



[40]

Class : U.K.G

NEPS

M.Marks : 60

Subject : Hindi

Term I 2021

Name :

Sec :

Roll no :

प्र० 1 :

पाठ लेखन

जल की शनी कितना पानी

जल की शनी कितना पानी

जल की शनी कितना पानी

जल की शनी शनी पानी

(05)

इस पाठ लेखन को अपनी Ans sheet पर पूरा करके लिखें ।

प्र० 2 : खाली स्थान भरें :-

1. इधर भी पानी , ----- भी पानी ।
2. ----- और पानी ही पानी ।
3. नीरा भीगी ----- भीगी ।
4. ----- और कीचड़ ही कीचड़ ।

(04)

प्र० 3 : शब्दों को जोड़ कर लिखें ।

1. अ + न + र + ट
2. ग + म + ल + ट

3. द + व + T + त
4. म + T + ल + T
5. न + T + न + 7
6. न + द + 7

(03)

प्र०४: पाँच फलों के नाम लिखो।

- 1.
- 2.
- 3.
- 4.
- 5.

(10)

प्र०५: उ (७) की मात्रा वाले पाँच शब्द लिखें।

(05)

प्र०६: ऊ (२) की मात्रा वाले पाँच शब्द लिखें।

(05)


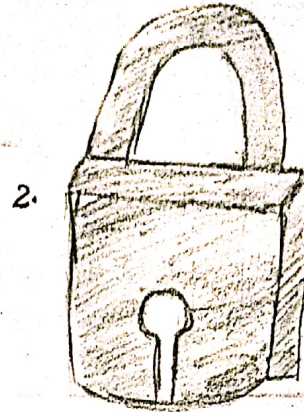
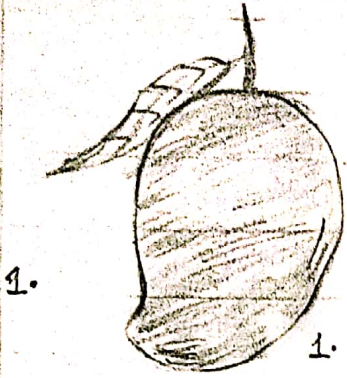
प्र०७: त्रोटलेश्व (Dictation words).

अपनी Assignment में से चुनकर कोई 20 शब्द लिखें

- | | |
|-----|-----|
| 1. | 11. |
| 2. | 12. |
| 3. | 13. |
| 4. | 14. |
| 5. | 15. |
| 6. | 16. |
| 7. | 17. |
| 8. | 18. |
| 9. | 19. |
| 10. | 20. |

(20).

प्र० ४ : चित्रों को पहचानकर उनके नाम लिखिए ।




(06)

प्र० ५ : चित्रों की सहायता से वाक्य पूरे कीजिए ।



मत तोड़ ।



पर मत चढ़ ।

(02)